

AP Human Geography Summer Assignment

AP Human Geography is not a traditional geography class. Instead of learning about the locations of physical and political features, this course mainly focuses on the interactions between humans, their environment and between human populations.

As a prerequisite to the course, AP Human Geography students are expected to enter class with a basic understanding of the physical and political geography of the world - the locations of the continents and the locations of countries found within each of these continents.

To ensure students are adequately prepared for geographic requirements, students are tasked, as their summer assignment for AP Human Geography, with being able to identify the locations of a series of physical and political arrangements in our world.

Task: Students are to identify, review, study, and memorize the locations of these physical and political arrangements and be able to pass an assessment of their knowledge of these arrangements during the first week of class.

Tips: Students should utilize the map quiz website Seterra which is linked below. There is a plethora of different ways to study and memorize the countries of the various continents on this website, so take your time in exploring the different quizzes as well as the different methods of taking the quizzes.

Assessment: Students will take an assessment the first week of school on each of the following maps. The assessment will be in the same format as the maps below.

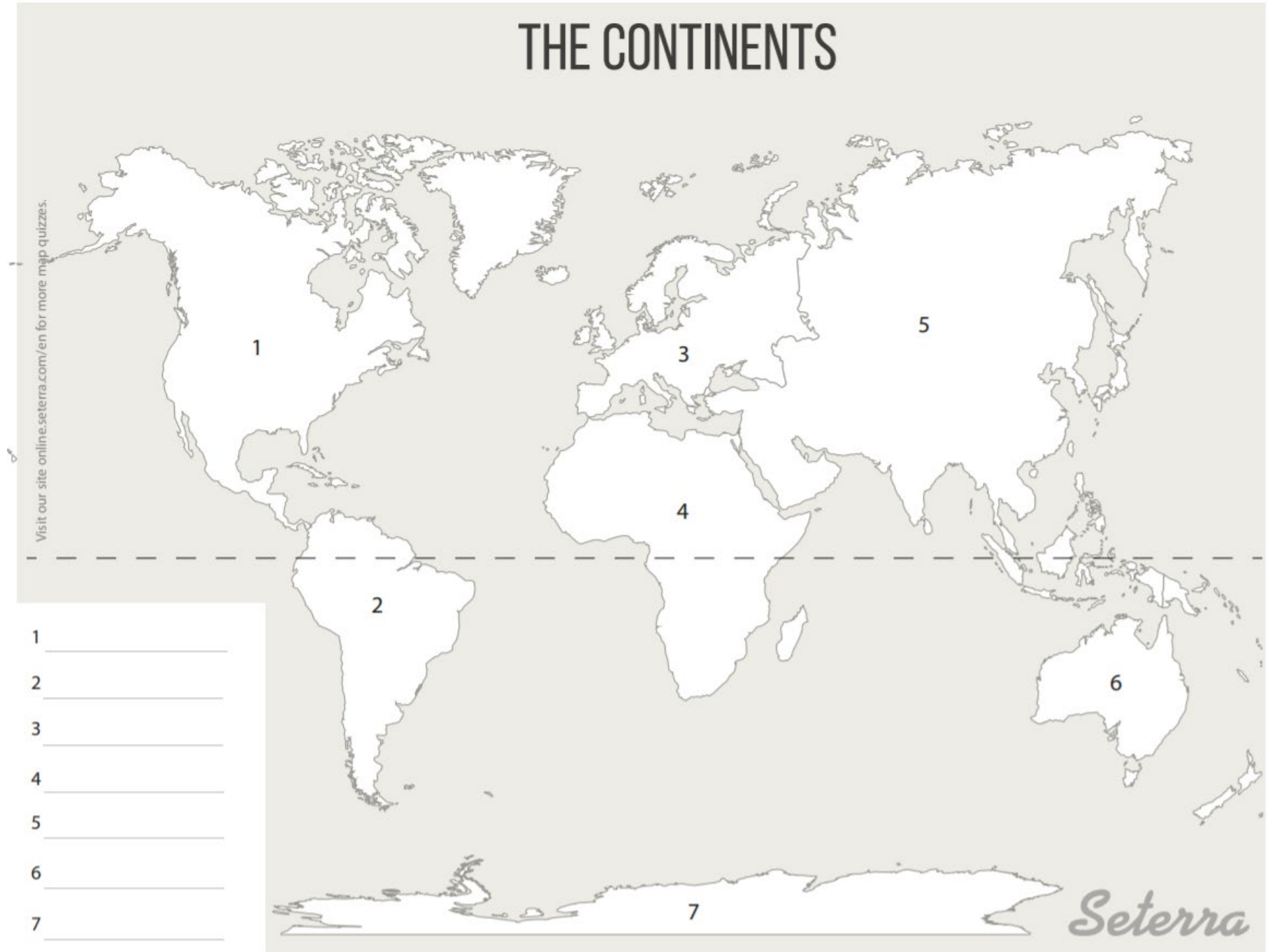
Link: <https://online.seterra.com/en>

I know the following might seem like a lot of work, but it will help prepare you for how rigorous this course will be and the amount of work you can expect to encounter throughout the school year. Remember, this is an Advanced Placement course. It is designed to emulate that of a college course. Good luck and have a good summer! I look forward to meeting all of you when school starts.

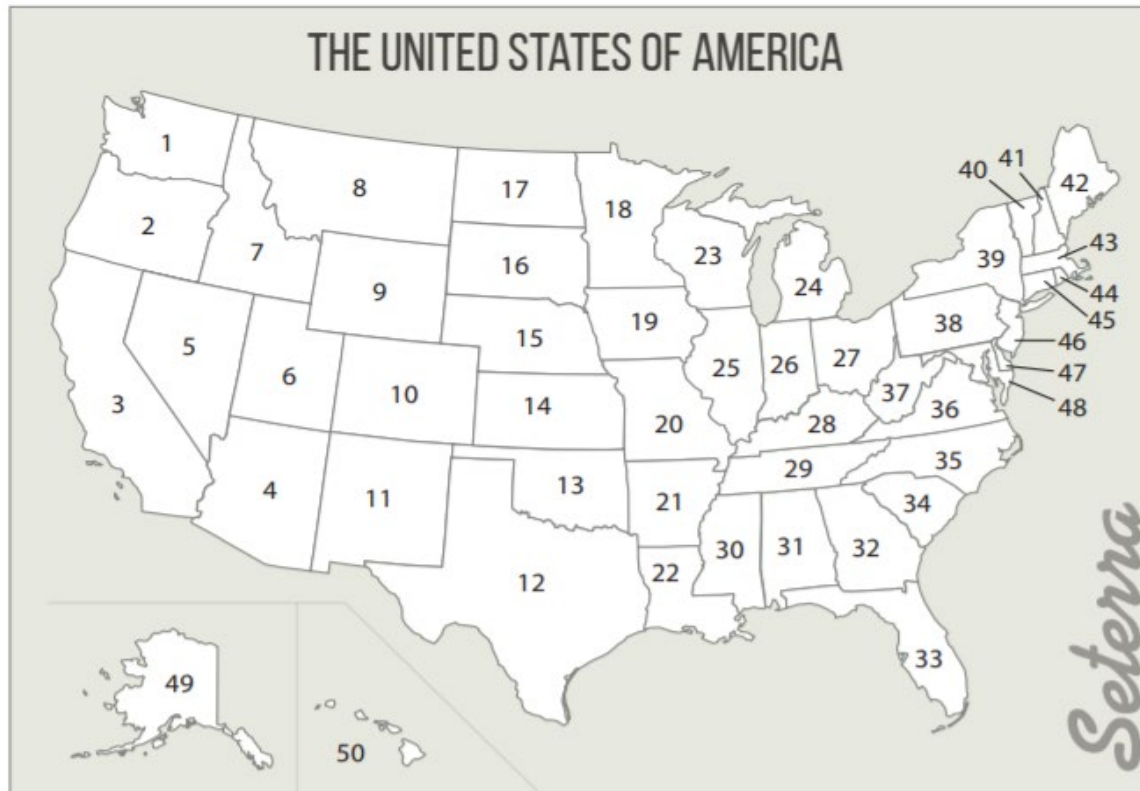
- Mr. Hracs

Map 1: World Continents

THE CONTINENTS



Map 2: The 50 United States



- | | | | | |
|----------|----------|----------|----------|----------|
| 1 _____ | 11 _____ | 21 _____ | 31 _____ | 41 _____ |
| 2 _____ | 12 _____ | 22 _____ | 32 _____ | 42 _____ |
| 3 _____ | 13 _____ | 23 _____ | 33 _____ | 43 _____ |
| 4 _____ | 14 _____ | 24 _____ | 34 _____ | 44 _____ |
| 5 _____ | 15 _____ | 25 _____ | 35 _____ | 45 _____ |
| 6 _____ | 16 _____ | 26 _____ | 36 _____ | 46 _____ |
| 7 _____ | 17 _____ | 27 _____ | 37 _____ | 47 _____ |
| 8 _____ | 18 _____ | 28 _____ | 38 _____ | 48 _____ |
| 9 _____ | 19 _____ | 29 _____ | 39 _____ | 49 _____ |
| 10 _____ | 20 _____ | 30 _____ | 40 _____ | 50 _____ |

Map 3: Countries of North and Central America

NORTH AND CENTRAL AMERICA | COUNTRIES

The map shows the geographical outlines of North and Central America. Numbered blanks are placed as follows: 1 in Canada, 2 in the United States, 3 in Mexico, 4 in Guatemala, 5 in El Salvador, 6 in Honduras, 7 in Nicaragua, 8 in Costa Rica, 9 in Panama, 10 in Colombia, 11 in Venezuela, 12 in Cuba, 13 in Haiti, and 14 in the Dominican Republic.

1	_____
2	_____
3	_____
4	_____
5	_____
6	_____
7	_____
8	_____
9	_____
10	_____
11	_____
12	_____
13	_____
14	_____

Seterra

Visit our site online seterra.com/en for more map quizzes.

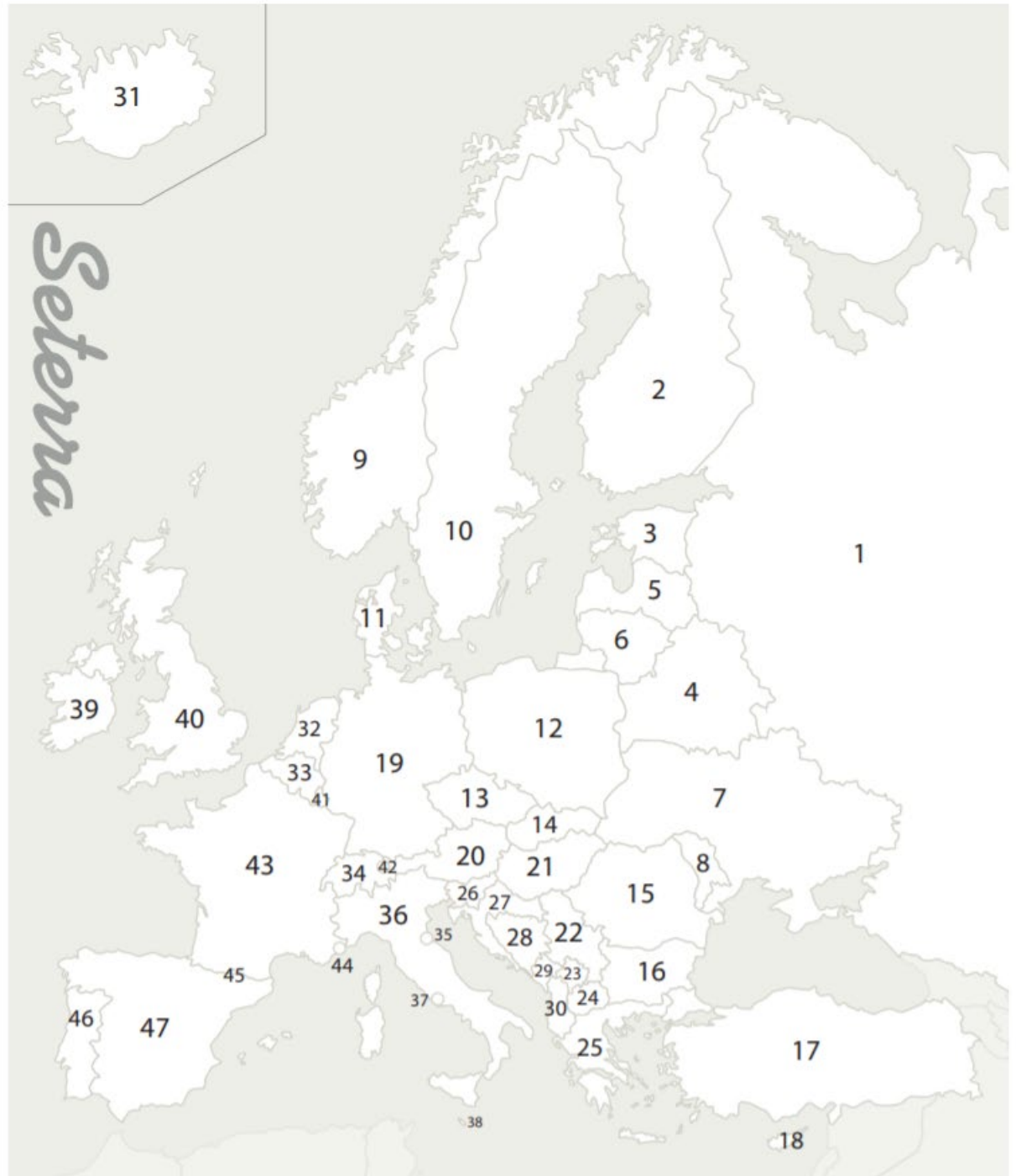
Map 4: Countries of South America



Map 5: Countries of Europe

EUROPE | COUNTRIES

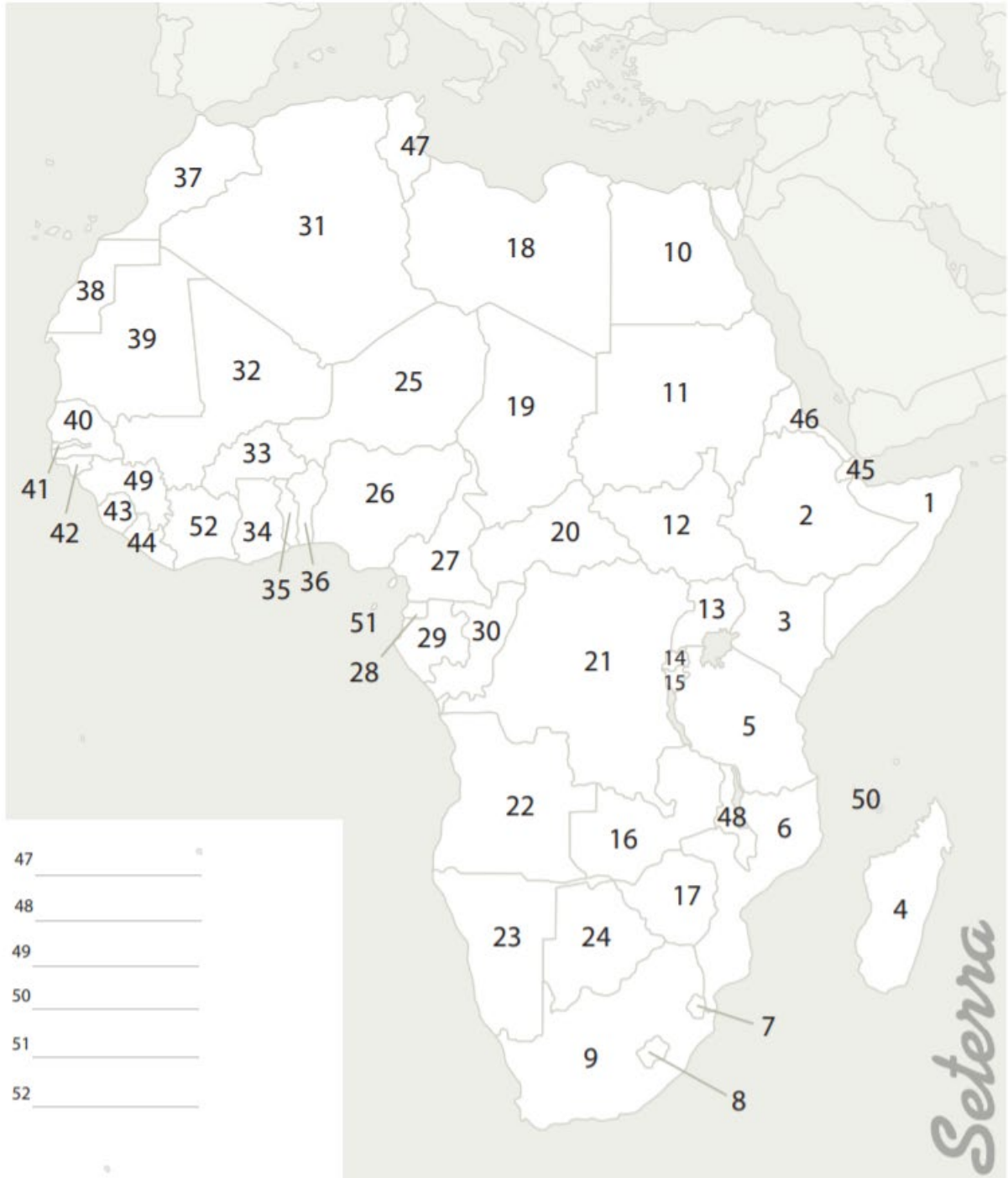
1 _____	25 _____
2 _____	26 _____
3 _____	27 _____
4 _____	28 _____
5 _____	29 _____
6 _____	30 _____
7 _____	31 _____
8 _____	32 _____
9 _____	33 _____
10 _____	34 _____
11 _____	35 _____
12 _____	36 _____
13 _____	37 _____
14 _____	38 _____
15 _____	39 _____
16 _____	40 _____
17 _____	41 _____
18 _____	42 _____
19 _____	43 _____
20 _____	44 _____
21 _____	45 _____
22 _____	46 _____
23 _____	47 _____
24 _____	



Map 6: Countries of Africa

AFRICA | COUNTRIES

- | | |
|----------|----------|
| 1 _____ | 24 _____ |
| 2 _____ | 25 _____ |
| 3 _____ | 26 _____ |
| 4 _____ | 27 _____ |
| 5 _____ | 28 _____ |
| 6 _____ | 29 _____ |
| 7 _____ | 30 _____ |
| 8 _____ | 31 _____ |
| 9 _____ | 32 _____ |
| 10 _____ | 33 _____ |
| 11 _____ | 34 _____ |
| 12 _____ | 35 _____ |
| 13 _____ | 36 _____ |
| 14 _____ | 37 _____ |
| 15 _____ | 38 _____ |
| 16 _____ | 39 _____ |
| 17 _____ | 40 _____ |
| 18 _____ | 41 _____ |
| 19 _____ | 42 _____ |
| 20 _____ | 43 _____ |
| 21 _____ | 44 _____ |
| 22 _____ | 45 _____ |
| 23 _____ | 46 _____ |



Map 7: Countries of Asia



ASIA | COUNTRIES

1 _____	10 _____	19 _____	28 _____	38 _____
2 _____	11 _____	20 _____	29 _____	39 _____
3 _____	12 _____	21 _____	30 _____	40 _____
4 _____	13 _____	22 _____	31 _____	41 _____
5 _____	14 _____	23 _____	32 _____	42 _____
6 _____	15 _____	24 _____	33 _____	43 _____
7 _____	16 _____	25 _____	34 _____	44 _____
8 _____	17 _____	26 _____	35 _____	45 _____
9 _____	18 _____	27 _____	36 _____	46 _____
			37 _____	47 _____

Map 8: Countries of Australia

